

Write your name here			
Surname		Other names	
Pearson Edexcel Level 1/Level 2 GCSE (9-1)		Centre Number <div style="display: flex; justify-content: space-around;"> <div style="width: 20px; height: 20px; border: 1px solid black;"></div> <div style="width: 20px; height: 20px; border: 1px solid black;"></div> <div style="width: 20px; height: 20px; border: 1px solid black;"></div> <div style="width: 20px; height: 20px; border: 1px solid black;"></div> <div style="width: 20px; height: 20px; border: 1px solid black;"></div> </div>	Candidate Number <div style="display: flex; justify-content: space-around;"> <div style="width: 20px; height: 20px; border: 1px solid black;"></div> <div style="width: 20px; height: 20px; border: 1px solid black;"></div> <div style="width: 20px; height: 20px; border: 1px solid black;"></div> <div style="width: 20px; height: 20px; border: 1px solid black;"></div> </div>
<h1 style="margin: 0;">Physics</h1> <h2 style="margin: 0;">Paper 2</h2> <div style="text-align: right; margin-top: 20px;"><b>Foundation Tier</b></div>			
Sample Assessment Materials for first teaching September 2016 <b>Time: 1 hour 45 minutes</b>		Paper Reference <b>1PH0/2F</b>	
<b>You must have:</b> Calculator, ruler			Total Marks   

### Instructions

- Use **black** ink or ball-point pen.
- **Fill in the boxes** at the top of this page with your name, centre number and candidate number.
- Answer **all** questions.
- Answer the questions in the spaces provided  
– *there may be more space than you need.*
- Calculators may be used.
- Any diagrams may NOT be accurately drawn, unless otherwise indicated.
- You must **show all your working out** with **your answer clearly identified** at the **end of your solution**.

### Information

- The total mark for this paper is 100.
- The marks for **each** question are shown in brackets  
– *use this as a guide as to how much time to spend on each question.*
- In questions marked with an **asterisk (\*)**, marks will be awarded for your ability to structure your answer logically showing how the points that you make are related or follow on from each other where appropriate.
- A list of equations is included at the end of this exam paper.

### Advice

- Read each question carefully before you start to answer it.
- Try to answer every question.
- Check your answers if you have time at the end.

*Turn over* ►

**S59296A**

©2017 Pearson Education Ltd.  
1/1/1/1/1/1/1/



Answer ALL questions. Write your answers in the spaces provided.

Some questions must be answered with a cross in a box ☒.  
If you change your mind about an answer, put a line through the box ☒ and then mark your new answer with a cross ☒.

- 1 (a) Three of the following are magnetic materials.

Which of these is **NOT** a magnetic material?

(1)

- ☐ A cobalt  
☐ B copper  
☐ C iron  
☐ D nickel

- (b) Figure 1 shows a magnet, P, hanging from a support.

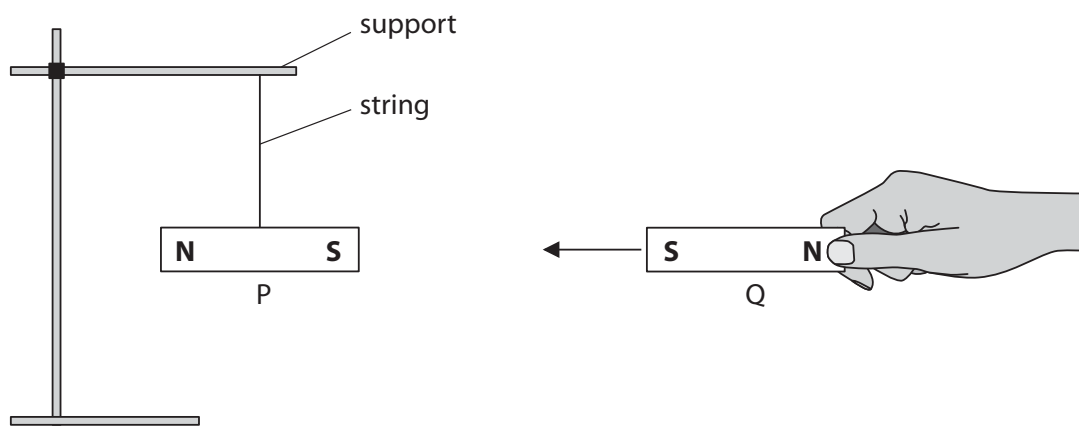


Figure 1

Explain what happens to magnet P when another magnet, Q, is brought towards it as shown.

(2)

.....

.....

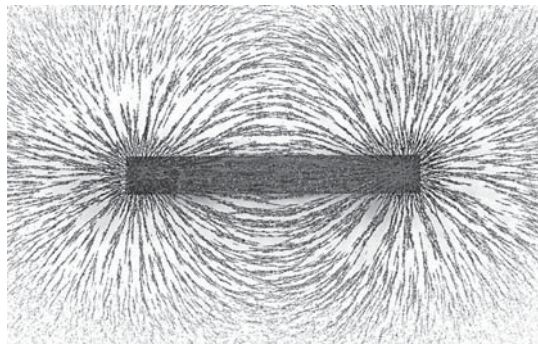
.....

.....



- (c) A student uses iron filings to show the pattern of a magnetic field around a bar magnet.

Figure 2 shows the pattern the student produced.



**Figure 2**

- (i) Describe how you can tell from Figure 2 where the magnetic field is strongest.

(2)

.....

.....

.....

.....

- (ii) The bar magnet is placed on a sheet of paper. Describe how the student could plot the shape and show the direction of the magnetic field around the magnet.

(3)

.....

.....

.....

.....

.....

.....

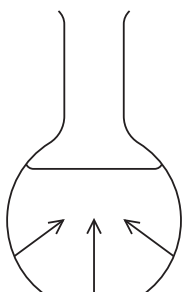
**(Total for Question 1 = 8 marks)**



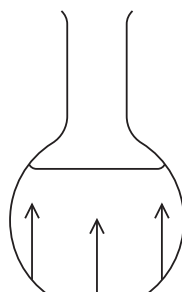
- 2 (a) Water in a glass bottle exerts a pressure on the glass.

Which of these shows the correct directions of the pressure exerted by the water on the glass?

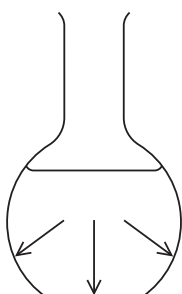
(1)



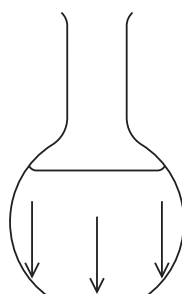
☐ A



☐ B



☐ C



☐ D

- (b) A box weighs 300 N.

The box rests on the floor.

The area of the box in contact with the floor is 0.75 m<sup>2</sup>.

- (i) Calculate the pressure exerted by the box on the floor.

Use the equation

$$\text{pressure} = \frac{\text{force}}{\text{area}}$$

(2)

pressure = ..... Pa



(ii) Which of these is a unit of pressure?

(1)

- ☐ A  $\text{kg/m}^2$
- ☐ B  $\text{kg m}^2$
- ☐ C  $\text{N/m}^2$
- ☐ D  $\text{N m}^2$

(c) A swimming pool contains fresh water.

The pressure 2 m below the surface of the swimming pool is measured.

The pressure 10 m below the surface of the sea is also measured.

The pressure 10 m below the surface of the sea is greater than the pressure 2 m below the surface of the swimming pool.

State **two** reasons why the pressure is greater 10 m below the surface of the sea.

(2)

1 .....

.....

2 .....

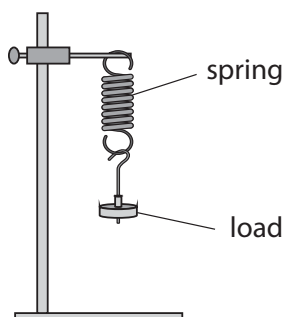
.....

(Total for Question 2 = 6 marks)



S 5 9 2 9 6 A 0 5 3 2

- 3 (a) A student uses the apparatus shown in Figure 3 to investigate the extension of a spring.



**Figure 3**

- (i) Describe how the student could measure the extension of the spring when a load is added.

(3)

.....

.....

.....

.....

.....

- (ii) The extension of the spring for a load of 1.5 N is 30 mm.

Calculate the spring constant for the spring.

Use the equation

$$\text{spring constant} = \frac{\text{load}}{\text{extension}}$$

(2)

spring constant = ..... N/mm



(b) The student measures the extension of the spring as he adds different loads (loading).

He then measures the extension of the spring as he takes the loads off (unloading).

He then repeats the investigation using a rubber band instead of the spring.

The tables in Figure 4 show his results.

spring			rubber band		
load in N	extension in mm	extension in mm	load in N	extension in mm	extension in mm
	loading	unloading		loading	unloading
0	0	0	0	0	0
1	20	20	1	14	25
2	40	40	2	33	42
3	60	60	3	60	60

Figure 4

State **two** similarities and **two** differences between the results for the spring and the results for the rubber band.

(4)

Similarity 1 .....

.....

Similarity 2 .....

.....

Difference 1 .....

.....

Difference 2 .....

.....

(Total for Question 3 = 9 marks)



S 5 9 2 9 6 A 0 7 3 2

DO NOT WRITE IN THIS AREA

DO NOT WRITE IN THIS AREA

DO NOT WRITE IN THIS AREA

DO NOT WRITE IN THIS AREA

DO NOT WRITE IN THIS AREA

DO NOT WRITE IN THIS AREA

BLANK PAGE





- 4 (a) Figure 5 shows some pictures of forces and the effects of the forces in the pictures.

Draw one line from each picture to the effect of the forces in the picture.

(3)

**pictures of forces**



**effects of forces**

rotation

extension

compression

acceleration

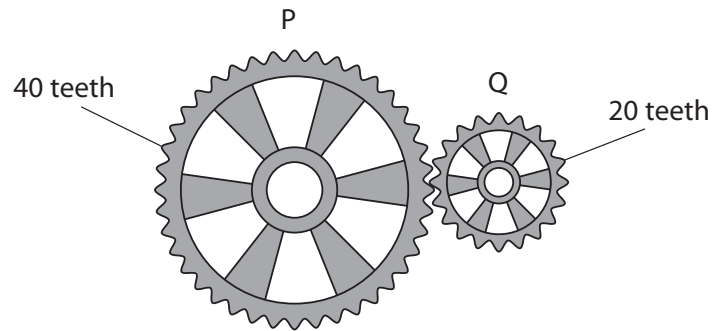
© Creative Commons License

**Figure 5**



S 5 9 2 9 6 A 0 9 3 2

(b) Figure 6 shows two gear wheels, P and Q.



**Figure 6**

When P turns, it causes Q to turn.

P makes one complete clockwise turn.

Which of these shows the effect on Q?

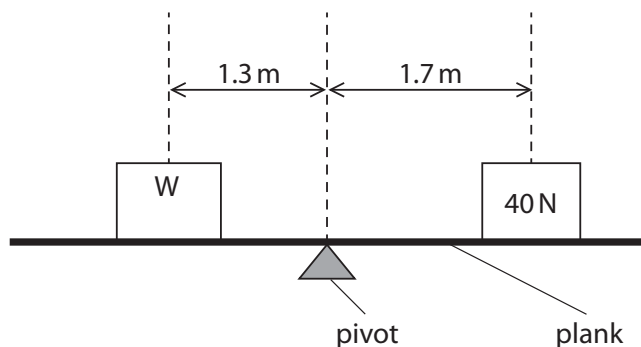
- ☐ **A** Q makes half a complete clockwise turn
- ☐ **B** Q makes 2 complete clockwise turns
- ☐ **C** Q makes half a complete anticlockwise turn
- ☐ **D** Q makes 2 complete anticlockwise turns

(1)



(c) Figure 7 shows two boxes on a plank.

The plank is balanced on a pivot.



**Figure 7**

One box has a weight of 40 N.

- (i) Calculate the moment of the 40 N weight about the pivot.

State the unit.

Use the equation

moment = force  $\times$  perpendicular distance

(3)

moment = ..... unit .....

- (ii) Calculate the weight,  $W$ , needed to balance the plank in Figure 7.

(3)

$W = \dots\dots\dots$  N

**(Total for Question 4 = 10 marks)**



S 5 9 2 9 6 A 0 1 1 3 2

5 (a) Which row in the table is correct?

	particles in a solid	particles in a gas
<input type="checkbox"/> A	move freely	move freely
<input type="checkbox"/> B	move freely	vibrate about fixed positions
<input type="checkbox"/> C	vibrate about fixed positions	move freely
<input type="checkbox"/> D	vibrate about fixed positions	vibrate about fixed positions

(1)

(b) Room temperature is  $20^{\circ}\text{C}$ .

What is  $20^{\circ}\text{C}$  on the kelvin temperature scale?

(1)

- ☐ A 293 K
- ☐ B 273 K
- ☐ C 253 K
- ☐ D 120 K

DO NOT WRITE IN THIS AREA

DO NOT WRITE IN THIS AREA

DO NOT WRITE IN THIS AREA

DO NOT WRITE IN THIS AREA

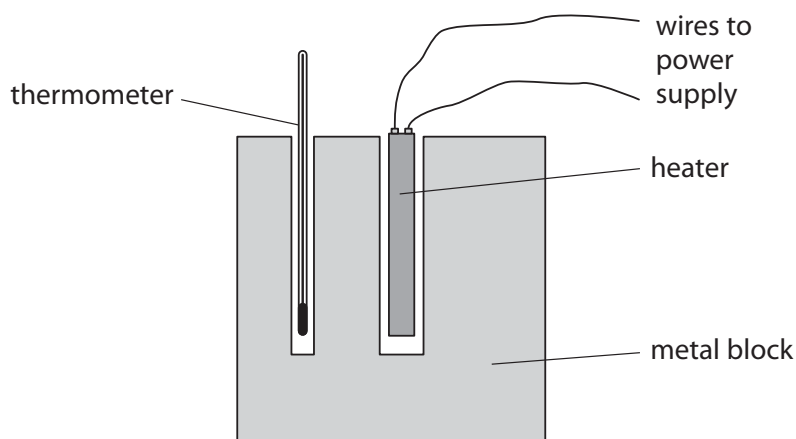
DO NOT WRITE IN THIS AREA

DO NOT WRITE IN THIS AREA



(c) A student sets up an experiment to measure the specific heat capacity of a metal.

Figure 8 shows the apparatus.



**Figure 8**

The heater is connected to a power supply and has a power of 50 W.

The student switches on the heater and measures the temperature rise after 5 minutes.

(i) State **two** improvements the student could make to the experiment.

(2)

- 1 .....
- 2 .....



S 5 9 2 9 6 A 0 1 3 3 2

(ii) Figure 9 shows the student's results.

mass of metal block	0.92 kg
power of heater	50 W
starting temperature	20 °C
finishing temperature	54 °C
time	300 s

**Figure 9**

Use the data in Figure 9 to calculate a value for the specific heat capacity of the metal.

Use the equation

$$\text{specific heat capacity} = \frac{\text{power} \times \text{time}}{\text{mass} \times \text{temperature rise}} \quad (3)$$

specific heat capacity = ..... J/kg °C



(d) An electric kettle is used to boil some water.

While the water is boiling, 566 000 J of thermal energy turns 0.250 kg of water into steam.

Calculate the specific latent heat of vaporisation of water.

Use an equation selected from the list of equations at the end of this paper.

(3)

specific latent heat = ..... J/kg

**(Total for Question 5 = 10 marks)**



S 5 9 2 9 6 A 0 1 5 3 2

6 (a) The nucleus of an atom contains

(1)

- ☐ A only electrons
- ☐ B only neutrons
- ☐ C electrons and neutrons
- ☐ D protons and neutrons

(b) A metal wire carries an electric current.

The charge that flows in the wire is made up of

(1)

- ☐ A electrons
- ☐ B protons
- ☐ C positive ions
- ☐ D negative ions

(c) Figure 10 shows a circuit used to light a lamp.

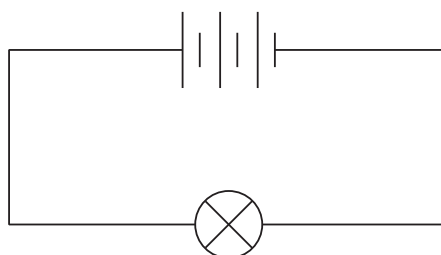


Figure 10

(i) State **two** things you could do to the circuit to make the lamp dimmer.

(2)

- 1 .....
- 2 .....





(ii) The energy transferred by the lamp in 20 s is 18 J.

Calculate the power of the lamp.

State the unit.

(4)

power of the lamp = .....

unit= .....

(iii) The potential difference across the lamp is 4.2 V.

The current in the lamp is then 0.19 A.

Calculate the resistance of the lamp.

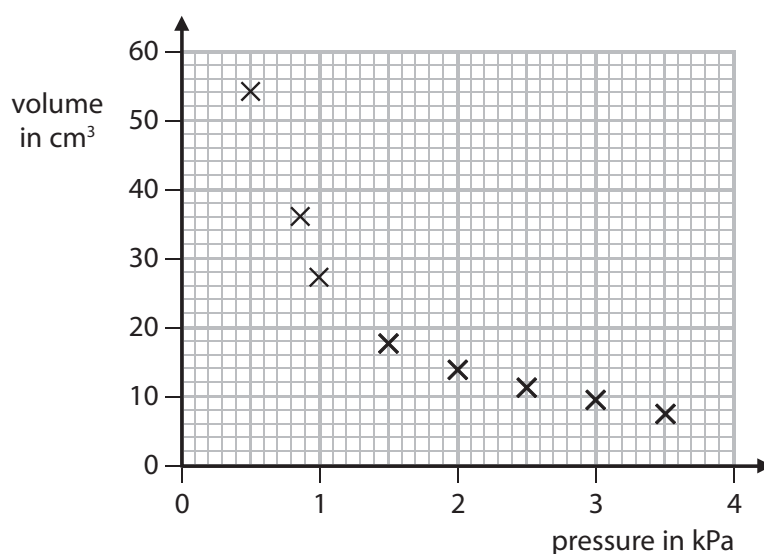
(3)

resistance of the lamp = .....  $\Omega$

**(Total for Question 6 = 11 marks)**



- 7 (a) Figure 11 is a graph that shows how the volume of a fixed mass of gas changes with pressure.



**Figure 11**

- (i) Draw the curve of best fit through the points on the graph.

(1)

- (ii) A student makes this statement about the graph in Figure 11.

“When the pressure is doubled, the volume halves”.

Use data from the graph to show whether this statement is correct.

(3)

.....

.....

.....

.....

.....

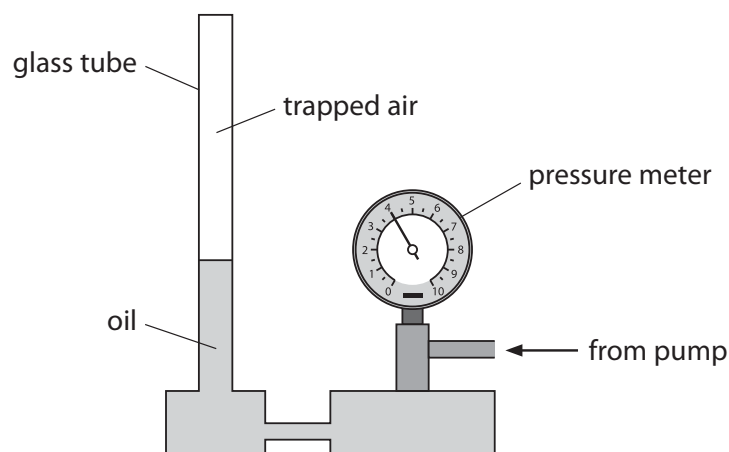
.....



- (b) Figure 12 shows the apparatus that is used to measure the pressure and volume of some air.

The air is trapped inside a glass tube.

The glass tube has no scale markings on it.



**Figure 12**

The volume of the trapped air is reduced by pumping oil up the glass tube.

The pressure meter is used to measure the pressure of the trapped air.

- (i) Describe how you could measure the volume of the trapped air.

(3)

.....

.....

.....

.....

.....

.....



S 5 9 2 9 6 A 0 1 9 3 2

- \*(ii) If the oil level goes down slowly, the volume of the trapped air increases and the pressure changes. The temperature remains constant.

Explain, in terms of particles, how the trapped air exerts a pressure on the inside of the glass tube and how the pressure changes as the volume increases.

(6)

.....

.....

.....

.....

.....

.....

.....

.....

.....

.....

.....

.....

.....

.....

.....

**(Total for Question 7= 13 marks)**

DO NOT WRITE IN THIS AREA

DO NOT WRITE IN THIS AREA

DO NOT WRITE IN THIS AREA

DO NOT WRITE IN THIS AREA

DO NOT WRITE IN THIS AREA

DO NOT WRITE IN THIS AREA



- 8 (a) Some forces act at a distance.

One example is the gravitational attraction between the Moon and the Earth.

Describe an example of another type of force acting at a distance, where the force is **not** gravitational.

(2)

.....

.....

.....

.....

- (b) A rock falls off the top of a cliff of height  $h$ .

Figure 13 shows the rock falling.

The Earth exerts a force of 150 N on the rock.

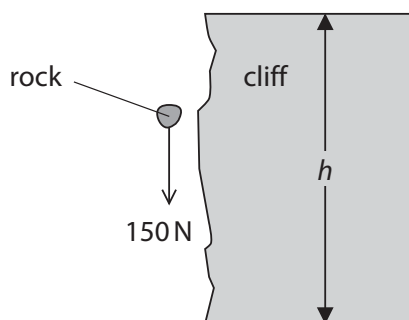


Figure 13

The work done by this force when the rock falls from the top to the bottom of the cliff is 2700 J.

- (i) Calculate the height,  $h$ , of the cliff.

(2)

$h = \dots\dots\dots$  m



S 5 9 2 9 6 A 0 2 1 3 2

(ii) State the value of the kinetic energy of the rock just before it hits the ground.

(1)

kinetic energy = ..... J

(iii) The mass of the rock in Figure 13 is 15 kg.

Calculate the velocity of the rock just before it reaches the bottom of the cliff.

(2)

velocity = ..... m/s

DO NOT WRITE IN THIS AREA

DO NOT WRITE IN THIS AREA

DO NOT WRITE IN THIS AREA

DO NOT WRITE IN THIS AREA

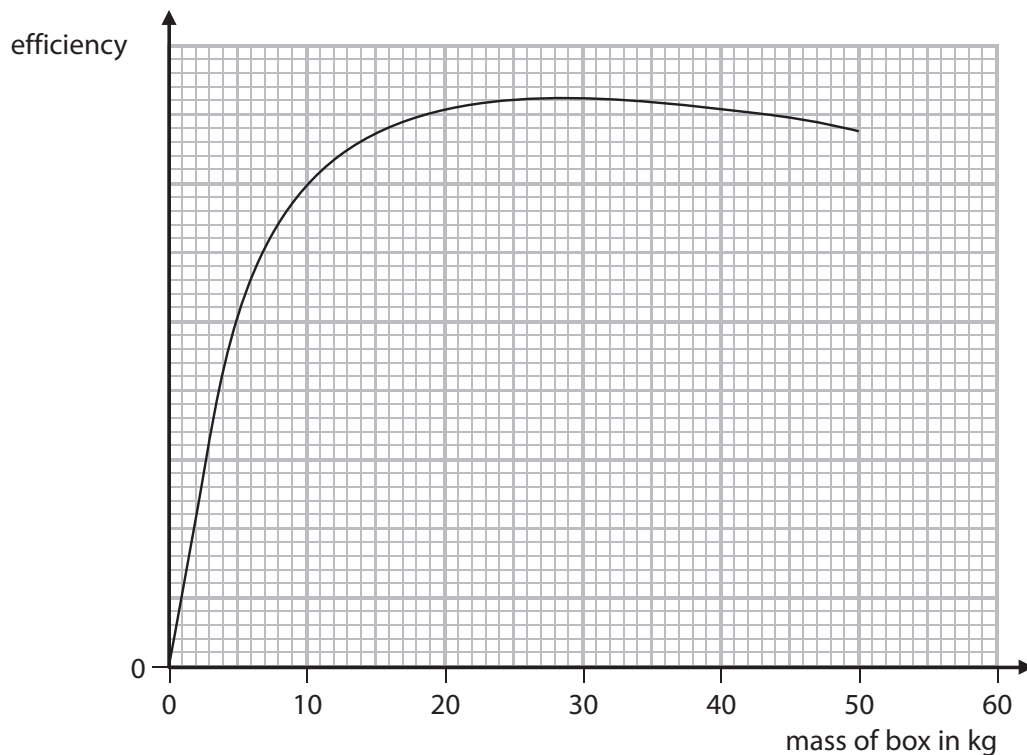
DO NOT WRITE IN THIS AREA

DO NOT WRITE IN THIS AREA



(c) An electric motor is used to lift a box.

Figure 14 shows how the efficiency of the electric motor changes as the mass of the box increases.



**Figure 14**

Describe how the efficiency of the electric motor depends on the mass of the box lifted.

(2)

**(Total for Question 8 = 9 marks)**



S 5 9 2 9 6 A 0 2 3 3 2

- 9 (a) An electric heater is connected to a 230V supply.

The power supplied to the heater is 2.6 kW.

Calculate the current in the heater.

(3)

current = ..... A

- (b) A car headlamp has a power rating of 55W when the current in the headlamp is 4.4A.

(i) State the equation relating power, current and resistance.

(1)

(ii) Calculate the resistance of the headlamp.

(3)

resistance = .....  $\Omega$





\*(c) The resistance of a thermistor changes with temperature.

Describe an experiment to investigate how the resistance of a thermistor changes with temperature.

You may draw a diagram to help with your answer.

(6)

**(Total for Question 9 = 13 marks)**



10 (a) Figure 15 shows a metal chair being sprayed with paint.

The paint droplets come from a gun with an electric charge.

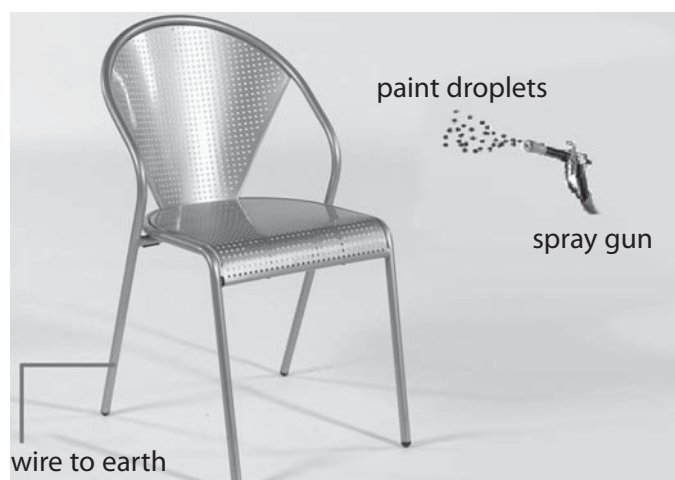


Figure 15

Inside the spray gun, electrons move along a charged wire towards the nozzle to charge the paint.

The charged paint droplets are sprayed from the nozzle.

The chair is connected to earth.

Which row of the table shows the correct combination of the charges as the charged paint droplets get near to the chair?

(1)

	paint droplets	chair
<input type="checkbox"/> A	negative	negative
<input type="checkbox"/> B	negative	positive
<input type="checkbox"/> C	positive	negative
<input type="checkbox"/> D	positive	positive



(b) Glass is an insulator.

A student rubs a piece of glass with some silk.

The glass becomes positively charged.

(i) Explain how rubbing silk charges the glass.

(2)

.....

.....

.....

.....

(ii) The silk is also charged when it rubs against the glass.

Describe the charge on the silk.

(2)

.....

.....

.....

.....

(c) (i) Describe **one** situation where separation of electric charge can create a spark.

(2)

.....

.....

.....

.....



S 5 9 2 9 6 A 0 2 7 3 2

- (ii) In a spark, the total charge of  $0.22\mu\text{C}$  (microcoulombs) flows in 2 ms (milliseconds).

Calculate the average current in that time.

(4)

average current = ..... A

**(Total for Question 10 = 11 marks)**

**TOTAL FOR PAPER = 100 MARKS**

DO NOT WRITE IN THIS AREA

DO NOT WRITE IN THIS AREA

DO NOT WRITE IN THIS AREA

DO NOT WRITE IN THIS AREA

DO NOT WRITE IN THIS AREA

DO NOT WRITE IN THIS AREA



## Equations

(final velocity)<sup>2</sup> – (initial velocity)<sup>2</sup> = 2 × acceleration × distance

$$v^2 - u^2 = 2 \times a \times x$$

energy transferred = current × potential difference × time

$$E = I \times V \times t$$

potential difference across primary coil × current in primary coil = potential difference across secondary coil × current in secondary coil

$$V_p \times I_p = V_s \times I_s$$

change in thermal energy = mass × specific heat capacity × change in temperature

$$\Delta Q = m \times c \times \Delta \theta$$

thermal energy for a change of state = mass × specific latent heat

$$Q = m \times L$$

to calculate pressure or volume for gases of fixed mass at constant temperature

$$P_1 V_1 = P_2 V_2$$

energy transferred in stretching = 0.5 × spring constant × (extension)<sup>2</sup>

$$E = \frac{1}{2} \times k \times x^2$$





DO NOT WRITE IN THIS AREA

DO NOT WRITE IN THIS AREA

DO NOT WRITE IN THIS AREA

DO NOT WRITE IN THIS AREA

DO NOT WRITE IN THIS AREA

DO NOT WRITE IN THIS AREA

BLANK PAGE



DO NOT WRITE IN THIS AREA

DO NOT WRITE IN THIS AREA

DO NOT WRITE IN THIS AREA

DO NOT WRITE IN THIS AREA

DO NOT WRITE IN THIS AREA

DO NOT WRITE IN THIS AREA

BLANK PAGE



S 5 9 2 9 6 A 0 3 1 3 2

DO NOT WRITE IN THIS AREA

DO NOT WRITE IN THIS AREA

DO NOT WRITE IN THIS AREA

**BLANK PAGE**

Every effort has been made to contact copyright holders to obtain their permission for the use of copyright material. Pearson Education Ltd. will, if notified, be happy to rectify any errors or omissions and include any such rectifications in future editions.

